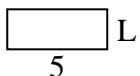





Determine the value of 'L'.

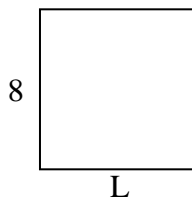
1) Area = $10u^2$



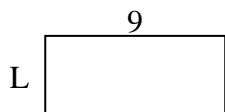
2) Area = $40u^2$



3) Area = $64u^2$



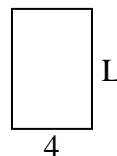
4) Area = $36u^2$



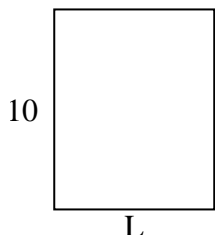
5) Area = $12u^2$




6) Area = $24u^2$



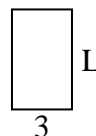
7) Area = $80u^2$



8) Area = $20u^2$




9) Area = $15u^2$



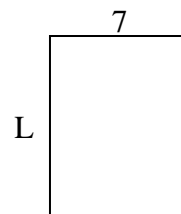
10) Area = $8u^2$



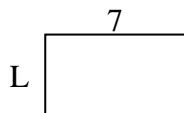
11) Area = $50u^2$



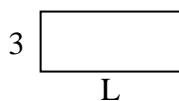
12) Area = $63u^2$



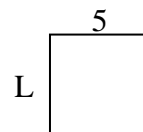
13) Area = $28u^2$



14) Area = $21u^2$



15) Area = $25u^2$



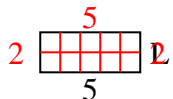
Answers

1. _____
2. _____
3. _____
4. _____
5. _____
6. _____
7. _____
8. _____
9. _____
10. _____
11. _____
12. _____
13. _____
14. _____
15. _____

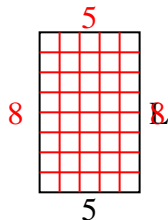


Determine the value of 'L'.

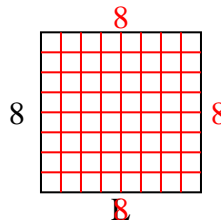
1) Area = $10u^2$



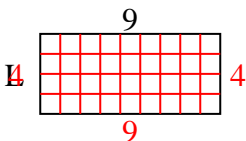
2) Area = $40u^2$



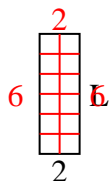
3) Area = $64u^2$



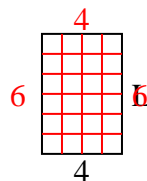
4) Area = $36u^2$



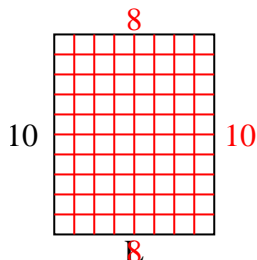
5) Area = $12u^2$



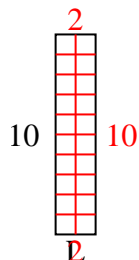
6) Area = $24u^2$



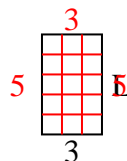
7) Area = $80u^2$



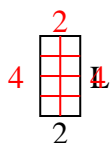
8) Area = $20u^2$



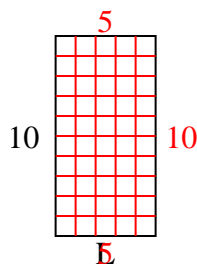
9) Area = $15u^2$



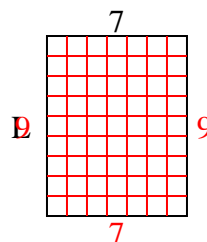
10) Area = $8u^2$



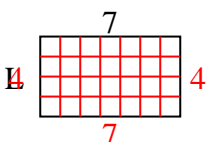
11) Area = $50u^2$



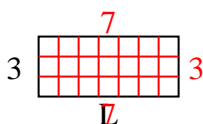
12) Area = $63u^2$



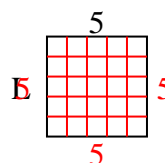
13) Area = $28u^2$



14) Area = $21u^2$



15) Area = $25u^2$



Answers

1. 2

2. 8

3. 8

4. 4

5. 6

6. 6

7. 8

8. 2

9. 5

10. 4

11. 5

12. 9

13. 4

14. 7

15. 5